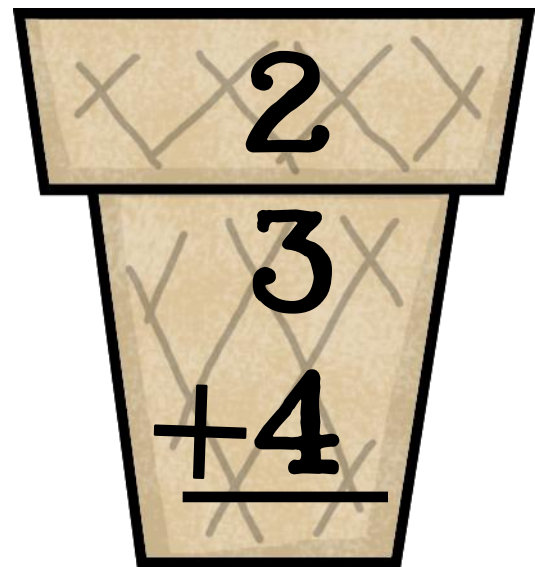
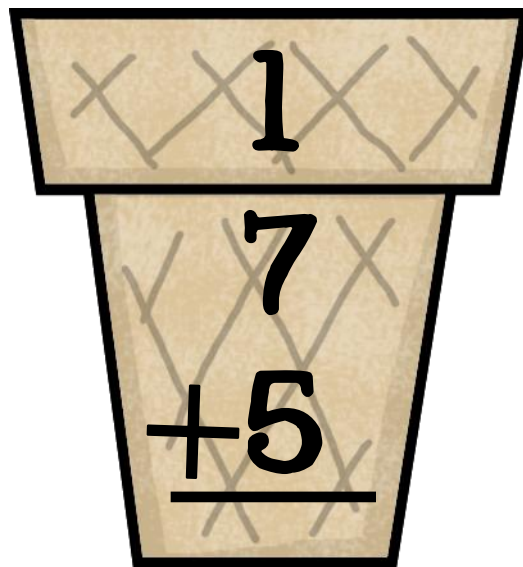
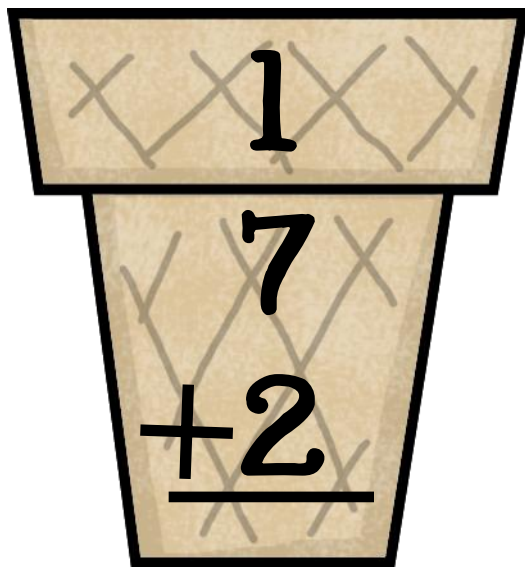
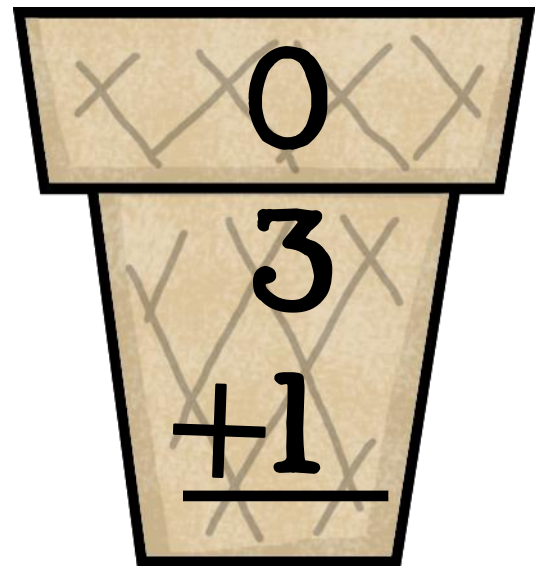
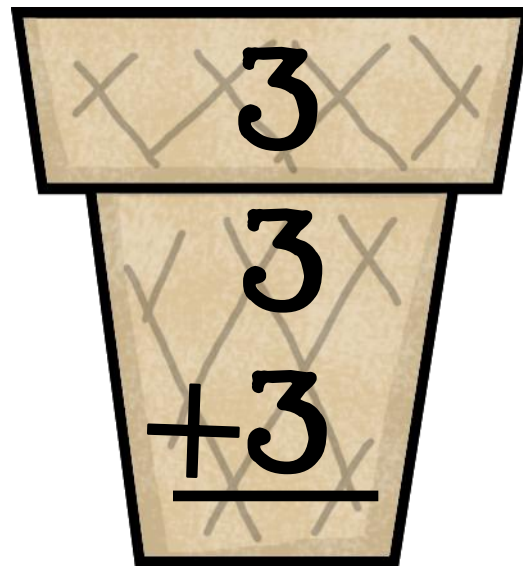


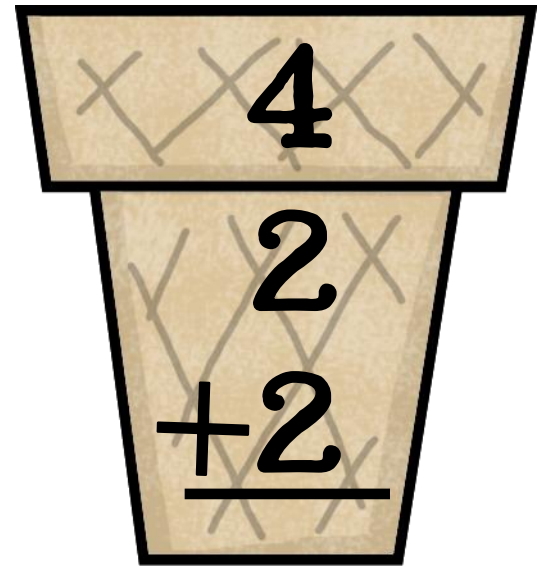
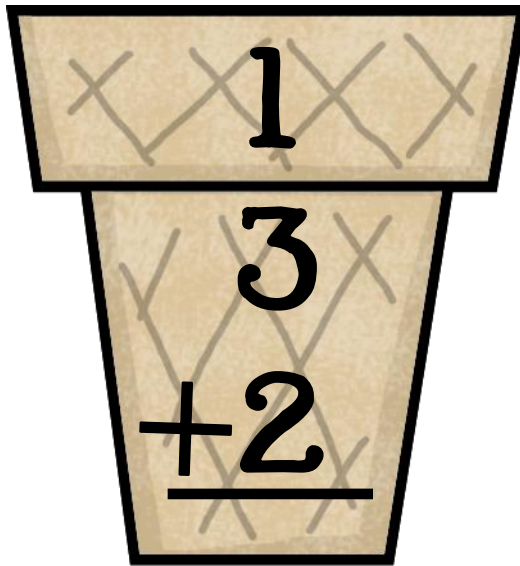
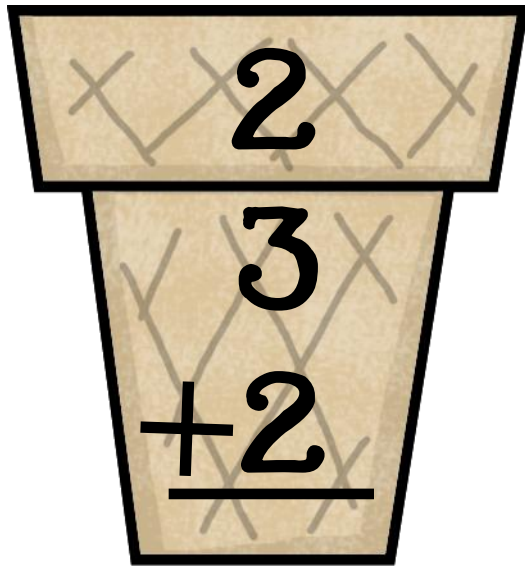
Ice Cream Addition

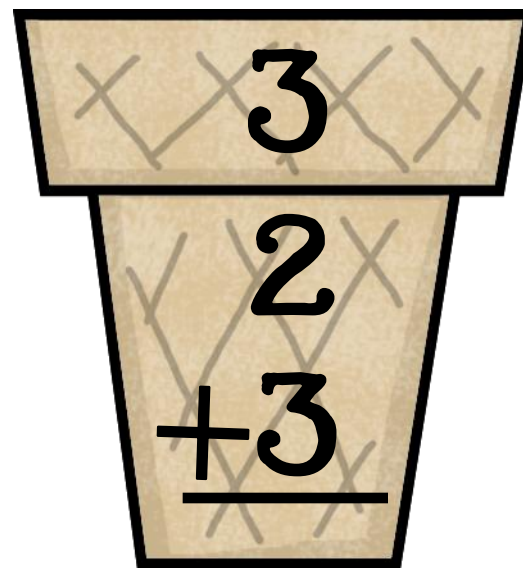
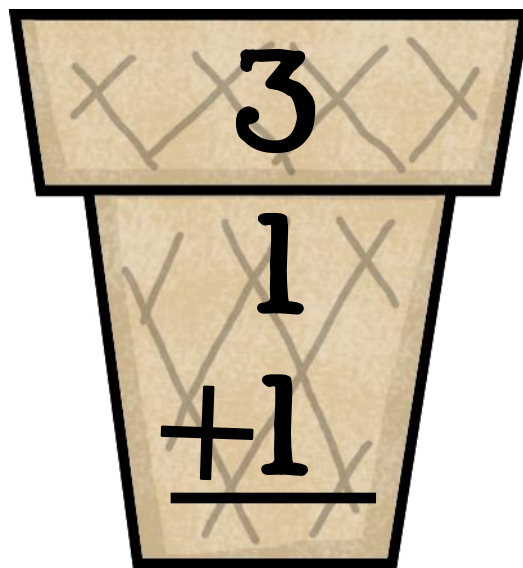
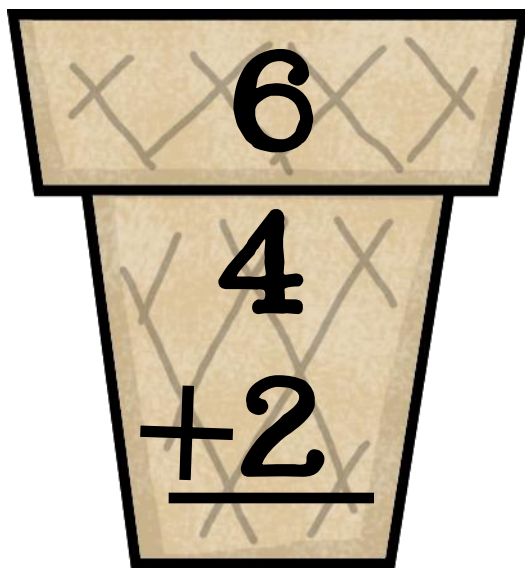
(adding 3 digits)











Name: _____

Adding with 3 digits



$$\begin{array}{r} 3 \\ 2 \\ +3 \\ \hline \end{array}$$

$$\begin{array}{r} 6 \\ 4 \\ +2 \\ \hline \end{array}$$

$$\begin{array}{r} 3 \\ 1 \\ +1 \\ \hline \end{array}$$

$$\begin{array}{r} 2 \\ 3 \\ +2 \\ \hline \end{array}$$

$$\begin{array}{r} 1 \\ 3 \\ +2 \\ \hline \end{array}$$

$$\begin{array}{r} 4 \\ 2 \\ +2 \\ \hline \end{array}$$

$$\begin{array}{r} 4 \\ 3 \\ +4 \\ \hline \end{array}$$

$$\begin{array}{r} 3 \\ 3 \\ +3 \\ \hline \end{array}$$

$$\begin{array}{r} 0 \\ 3 \\ +1 \\ \hline \end{array}$$

$$\begin{array}{r} 2 \\ 3 \\ +4 \\ \hline \end{array}$$

$$\begin{array}{r} 1 \\ 7 \\ +5 \\ \hline \end{array}$$

$$\begin{array}{r} 1 \\ 7 \\ +2 \\ \hline \end{array}$$



Molly, Sam and Tim are going out for ice cream. Molly gets 4 scoops. Sam gets 5 scoops. Tim gets 3 scoops. How many scoops did they get in all? Show your work.