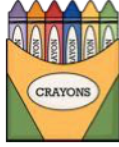


Name: \_\_\_\_\_


## Graphing School Supplies

Directions: Graph the number of each type of school supply, then answer the questions using the graph.


five



ten



three



two



eight



four






1. How many total school supplies are there? \_\_\_\_\_
2. How many more pencils are there than scissors? \_\_\_\_\_
3. How many cutting and pasting supplies are there? \_\_\_\_\_
4. How many more glue bottles are there than crayon packs? \_\_\_\_\_
5. How many total crayons are there in the five packs? \_\_\_\_\_