





Name: _____

Map Symbols

Directions: Maps use symbols, or pictures, to indicate where things are located on the map. Look at the pictures below. For what symbols do you think these pictures might be used? Write a label for each picture that might be used on a map.



Make up your own map symbol.