

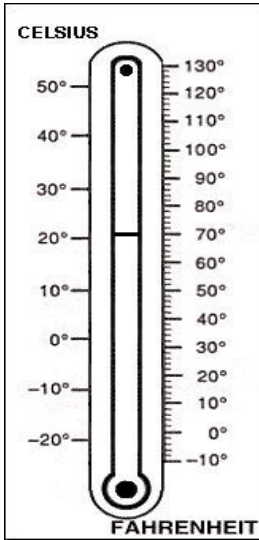
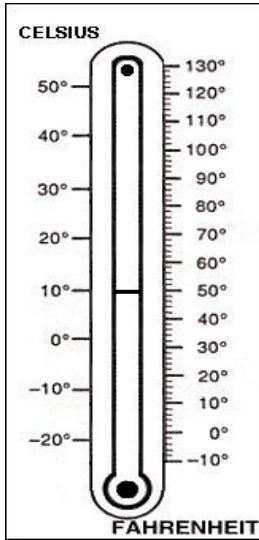
Name: _____

Thermometer Differences

Directions: Record the change in temperature between thermometers.

10:00 am Tuesday

12:00 pm Tuesday



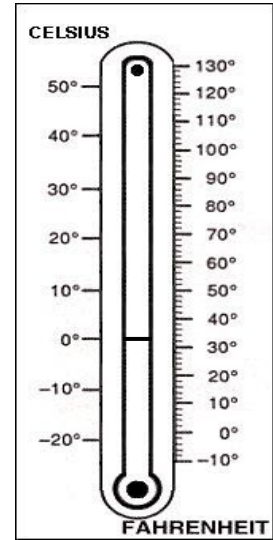
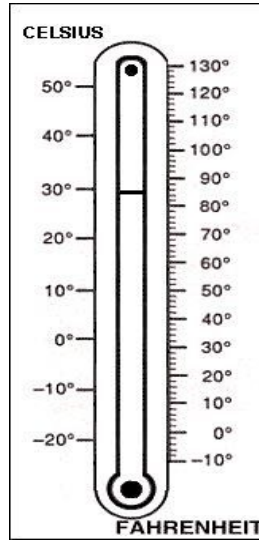
_____ °F

_____ °F

Difference in degrees: _____ °F

6:30 pm Sunday

7:45 pm Sunday



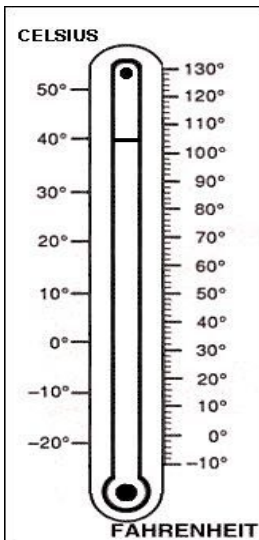
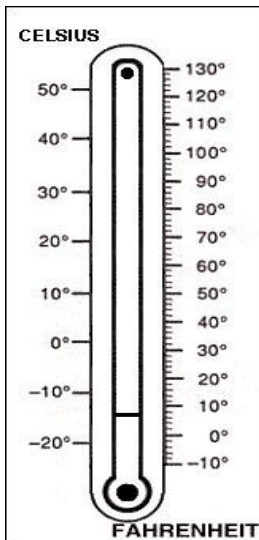
_____ °C

_____ °C

Difference in degrees: _____ °C

12:00 am Friday

8:30 am Saturday



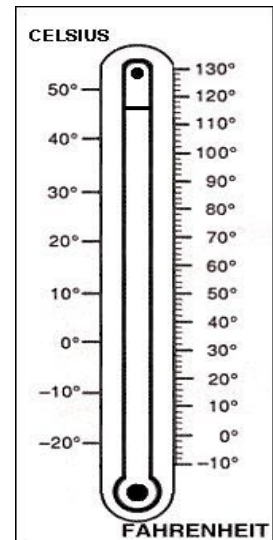
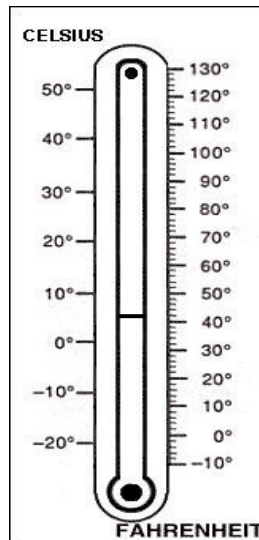
_____ °C

_____ °C

Difference in degrees: _____ °C

1:45 am Monday

2:00 pm Monday



_____ °F

_____ °F

Difference in degrees: _____ °F