




Name: \_\_\_\_\_

# Adding 6



**Directions:** Match the swimmers to the correct starfish.



$7 + 6 =$



$8 + 6 =$



$4 + 6 =$





$6 + 6 =$



$9 + 6 =$




$1 + 6 =$



$3 + 6 =$



$10 + 6 =$



Write your own add 6 number sentences.

\_\_\_\_\_ + \_\_\_\_\_ = \_\_\_\_\_

\_\_\_\_\_ + \_\_\_\_\_ = \_\_\_\_\_