





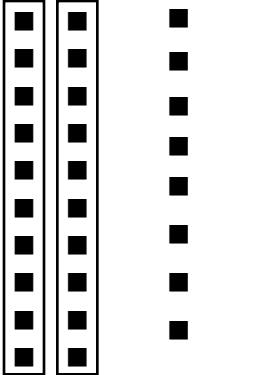





Name: _____

Counting Tens and Ones

Directions: Count the tens and ones below. Write how many tens and ones there are in the chart. Then write the number the 2 digits create.

1. 	<table border="1"><thead><tr><th>tens</th><th>ones</th></tr></thead><tbody><tr><td></td><td></td></tr></tbody></table> _____	tens	ones			5. 	<table border="1"><thead><tr><th>tens</th><th>ones</th></tr></thead><tbody><tr><td></td><td></td></tr></tbody></table> _____	tens	ones		
tens	ones										
tens	ones										
2. 	<table border="1"><thead><tr><th>tens</th><th>ones</th></tr></thead><tbody><tr><td></td><td></td></tr></tbody></table> _____	tens	ones			6. 	<table border="1"><thead><tr><th>tens</th><th>ones</th></tr></thead><tbody><tr><td></td><td></td></tr></tbody></table> _____	tens	ones		
tens	ones										
tens	ones										
3. 	<table border="1"><thead><tr><th>tens</th><th>ones</th></tr></thead><tbody><tr><td></td><td></td></tr></tbody></table> _____	tens	ones			7. 	<table border="1"><thead><tr><th>tens</th><th>ones</th></tr></thead><tbody><tr><td></td><td></td></tr></tbody></table> _____	tens	ones		
tens	ones										
tens	ones										
4. 	<table border="1"><thead><tr><th>tens</th><th>ones</th></tr></thead><tbody><tr><td></td><td></td></tr></tbody></table> _____	tens	ones			8. 	<table border="1"><thead><tr><th>tens</th><th>ones</th></tr></thead><tbody><tr><td></td><td></td></tr></tbody></table> _____	tens	ones		
tens	ones										
tens	ones										

Name: _____

Counting Tens and Ones

Directions: Count the tens and ones below. Write how many tens and ones there are in the chart. Then write the number the 2 digits create.

Answer Key

1. 32
2. 45
3. 54
4. 28
5. 42
6. 60
7. 55
8. 38

