


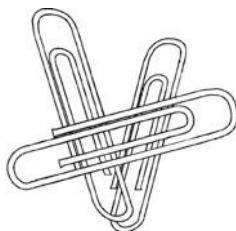
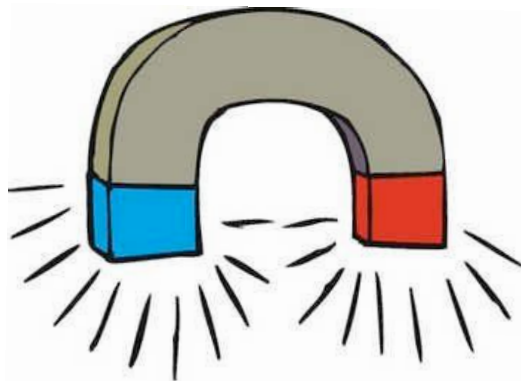


Name: \_\_\_\_\_

# Is it Magnetic?

**Directions:** Draw a line from the magnet to the objects that are magnetic.



Name: \_\_\_\_\_

# Is it Magnetic?

**Directions:** Draw a line from the magnet to the objects that are magnetic.

**Answer Key**

