

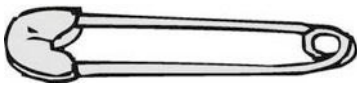


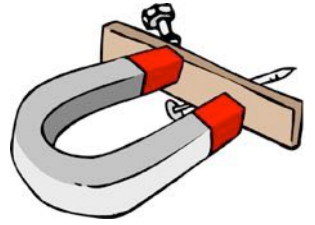


Name: \_\_\_\_\_

## Magnets

Directions: Look at the objects below. Think about whether or not they would be attracted to a magnet. Circle the objects that would be attracted to a magnet. Discuss.



Can you test your guesses?