

Rainbow Place Value





5 tens

7 ones

www.HaveFunTeaching.com



2 tens

7 ones

www.HaveFunTeaching.com



8 tens

5 ones

www.HaveFunTeaching.com



3 tens

3 ones



4 tens

3 ones



9 tens

2 ones



1 tens
8 ones



5 tens
5 ones



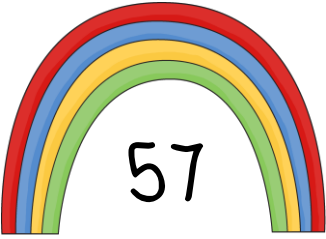
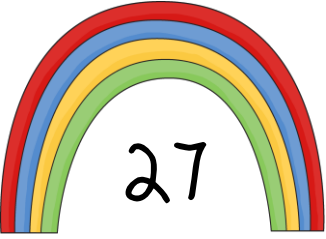
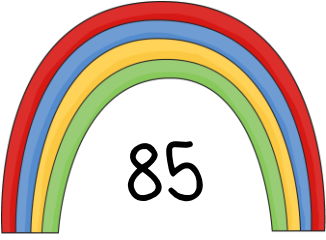
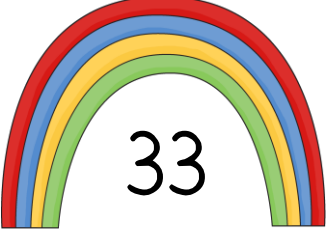
7 tens
4 ones

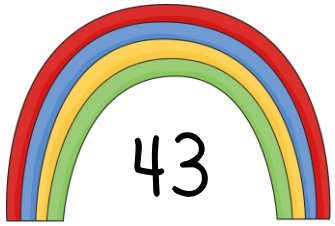
Name: _____



Rainbow Place Value



	Write the number. 	How many tens and ones? ____tens ____ones	Write the equation. ____ + ____ = ____
	Write the number. 	How many tens and ones? ____tens ____ones	Write the equation. ____ + ____ = ____
	Write the number. 	How many tens and ones? ____tens ____ones	Write the equation. ____ + ____ = ____
	Write the number. 	How many tens and ones? ____tens ____ones	Write the equation. ____ + ____ = ____



Write the number.

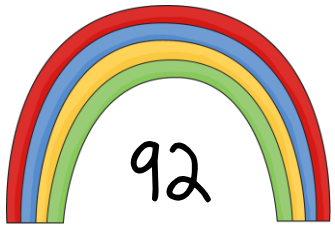
How many tens and ones?

Write the equation.

43

----tens
----ones

___ + ___ = ___



Write the number.


How many tens and ones?

Write the equation.

92

----tens
----ones

___ + ___ = ___



Write the number.

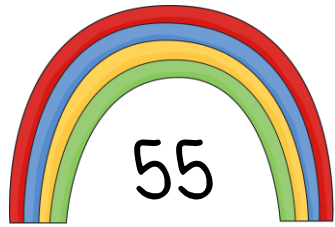
How many tens and ones?

Write the equation.

18

----tens
----ones

___ + ___ = ___



Write the number.


How many tens and ones?

Write the equation.

55

----tens
----ones

___ + ___ = ___



Write the number.

How many tens and ones?

Write the equation.

74

----tens
----ones

___ + ___ = ___