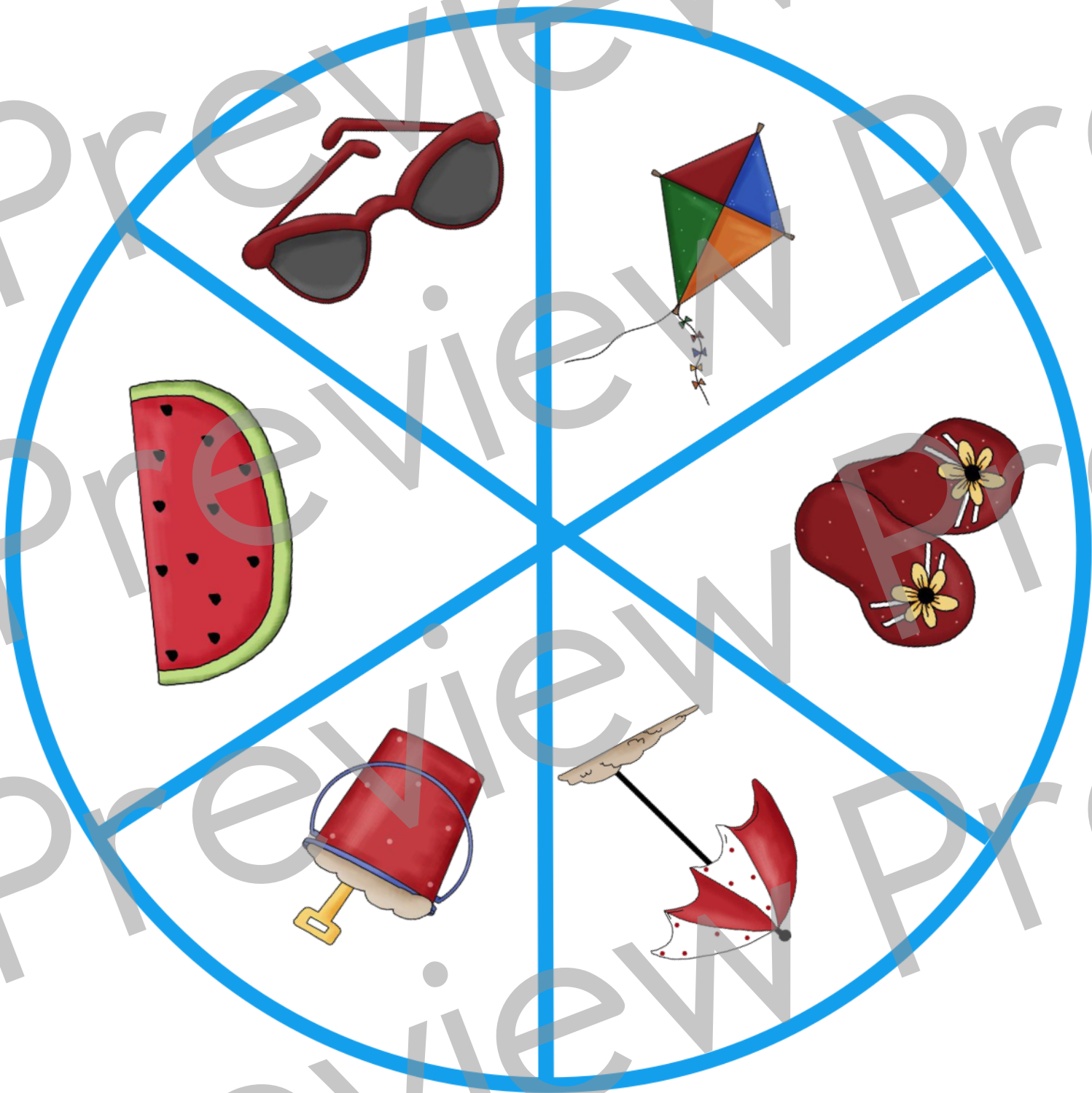








# Summer Graphing



[www.HaveFunTeaching.com](http://www.HaveFunTeaching.com)  
Graphics • Scrappin Doodles



Picture	tally	#
		
		
		
		
		
		

# Summer Time

Name: \_\_\_\_\_

Spin the spinner 20 times. Each time you spin, put a tally next to the picture. After 20 spins, answer the questions.

- How many times did the spinner land on the watermelon?  
\_\_\_\_\_
- How many times did the spinner land on the sunglasses?  
\_\_\_\_\_
- Did it land on the sunglasses more or the watermelon?  
\_\_\_\_\_

Name: \_\_\_\_\_

# Summer Spin & Graph

10						
9						
8						
7						
6						
5						
4						
3						
2						
1						
						



Name: \_\_\_\_\_



1. How many times did the spinner land on the watermelon?  
\_\_\_\_\_

2. How many times did the spinner land on the sunglasses?  
\_\_\_\_\_

3. Did the spinner land on the sunglasses more or the watermelon?  
\_\_\_\_\_

4. How many times did the spinner land on the kite?  
\_\_\_\_\_

5. How many times did the spinner land on the flip flops?  
\_\_\_\_\_

6. Did it land on the kite more or the flip flops?  
\_\_\_\_\_

